

Natural Numbers 0-10

Additions and Subtractions 0-10





Evaluation Test

1. Arrange the numbers in each group in descending order.

5 8 2 7

3 7 4 9

2. How many fruits are in each group?




3. The sum of 3 and 6 is _____.

4. 2 is _____ less than 7.

5. The difference between 8 and 4 is _____.

6. 10 is _____ more than 4.

7. _____ less than 8 is 3.



8. Ana and her sister have 8 oranges which they share equally. How many oranges does each girl get?



*Scan the QR code to check the results